

# AZAAN INTERNATIONAL SCHOOL

Grade - I

Activity Sheet-IV

Subject- MATHS

Name: \_\_\_\_\_ Class: \_\_\_\_\_ Sec: \_\_\_\_\_

## Chapter: 4. Shapes And Patterns


I. Count the following shapes in the picture below and write in the given boxes.

a. Squares \_\_\_\_\_

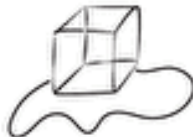

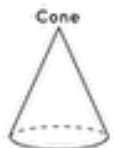
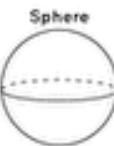
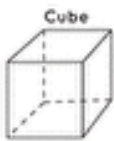
b. Triangles \_\_\_\_\_

c. Rectangles \_\_\_\_\_


d. Circles \_\_\_\_\_



II. Match the shapes with the objects.



III. Complete the patterns given below:



IV. Complete the number pattern:

2 5 10 2 5 10 2 \_\_\_\_\_

3 3 2 2 3 3 2 \_\_\_\_\_

1 2 1 2 1 2 1 \_\_\_\_\_

V. Draw a picture using any two flat shapes.

